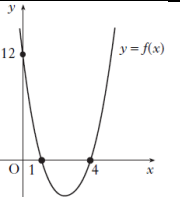
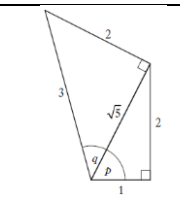
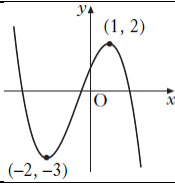
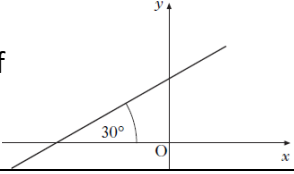


<p>41 The graph has an equation of the form $y = k(x - a)(x - b)$. What is the equation of the graph?</p>		
<p>42</p> <p>For what values of x is $6 + x - x^2 < 0$?</p>		
<p>43</p> <p>Express $\log_a 25 + \log_a 4 - \log_a 20$ as the logarithm of a single number.</p>		
<p>44</p> <p>Solve $\cos 2x - 3\cos x + 2 = 0$ for $0 \leq x < 360$.</p>		
<p>45 The diagram shows two right-angled triangles with sides and angles given. What is the value of $\sin(p + q)$?</p>		
<p>46</p> <p>What is the derivative of $(x^3 + 4)^2$?</p>		
<p>47 The point $P(5, 12)$ lies on the curve with equation $y = x^2 - 4x + 7$. Find the equation of the tangent to the curve.</p>		
<p>48</p> <p>Find $\int 4 \sin(2x + 3) dx$.</p>		
<p>49</p> <p>Find $\int_{-2}^2 (x + 1)^2 dx$.</p>		
<p>50</p> <p>Write $2\sin x^\circ + 3\cos x^\circ$ in the form $k\sin(x - a)$, for $k > 0$ and $0 \leq a \leq 360$.</p>		

<p>51 Functions f and g are defined on a suitable domain by $f(x) = \cos x$ and $g(x) = x + \frac{\pi}{6}$. What is the value of $f\left(g\left(\frac{\pi}{6}\right)\right)$?</p>	
<p>52 The diagram shows the graph of $y = f(x)$. Sketch $y = f(x + 2) - 1$</p>	
<p>53 Given that $\mathbf{u} = \begin{pmatrix} 2 \\ 0 \\ 1 \end{pmatrix}$ and $\mathbf{v} = \begin{pmatrix} -1 \\ 2 \\ 4 \end{pmatrix}$, find $3\mathbf{u} - 2\mathbf{v}$ in component form.</p>	
<p>54 The vectors $x\mathbf{i} + 5\mathbf{j} + 7\mathbf{k}$ and $-3\mathbf{i} + 2\mathbf{j} - \mathbf{k}$ are perpendicular. What is the value of x?</p>	
<p>55 Prove that $2\cos^2 A + 3\sin^2 A - 2 = \sin^2 A$.</p>	
<p>56 A line makes an angle of 30° with the positive direction of the x-axis as shown. What is the gradient of the line?</p>	
<p>57 Find the equation of the perpendicular bisector of the line joining $P(3, -3)$ to $Q(-1, 9)$.</p>	
<p>58 Write down the centre and calculate the radius of the circle with equation $x^2 + y^2 + 8x + 4y - 38 = 0$</p>	
<p>59 A sequence is defined by the recurrence relation $u_{n+1} = 2u_n + 3$ and $u_0 = 1$. What is the value of u_3?</p>	
<p>60 Calculate the shaded area enclosed by the line $y = 2x - 3$ and the curve $y = x^2 - 5x - 3$.</p>	