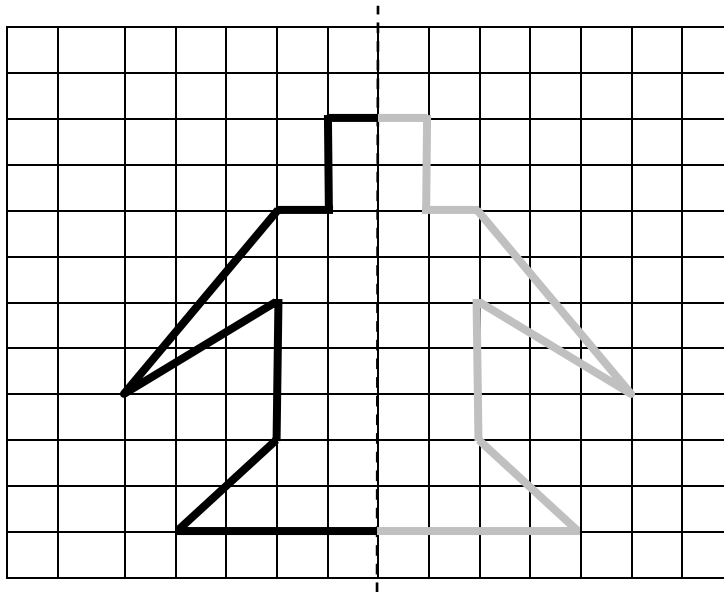


## Foundation Paper 2 2001

Created by  
Graduate Bsc (Hons) MathsSci (Open) GIMA

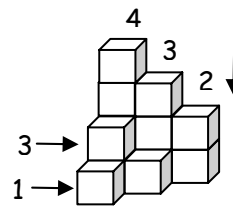
1. Completing the diagram we have:



2. Given Gurprit earns £11 258 per year. His weekly paid will be, using a calculator:

$$£11\,258 \div 52 = £216.50$$

3. Counting the cubes we have:

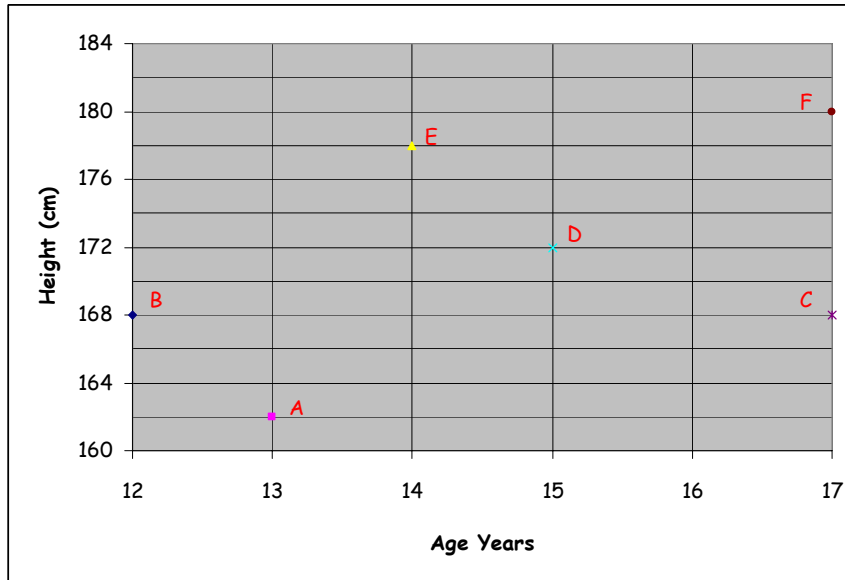


$$4 + 3 + 2 + 3 + 1 = 13$$

## Foundation Paper 2 2001

Created by  
Graduate Bsc (Hons) MathsSci (Open) GIMA

4. Given graph.



(a) If Karen is dot A then her age and height are 13 years and 162 cm.

(b) From clues,  
Since Maria is the same height as Shona.  
Then they must either B,C or C,B.

Tom and Maria are twins therefore we have:  
Maria must be the letter C, Shona must be the letter B and Tom must be the letter F.

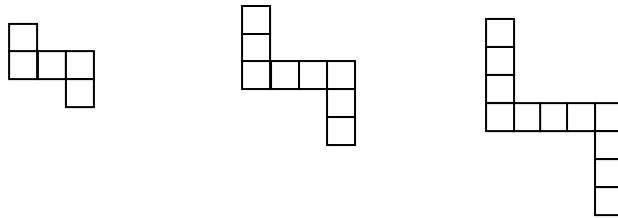
Peter is taller than Robert hence Peter is the letter E and Robert is D.

NAME	Karen	Maria	Tom	Shona	Peter	Robert
DOT	A	C	F	B	E	D

## Foundation Paper 2 2001

Created by  
Graduate Bsc (Hons) MathsSci (Open) GIMA

5. Given the patterns, we are adding on 3 squares each time.



- (a) Completing the table we get:

Pattern Number	1	2	3	4	5	6		11
Number of squares	5	8	11	14	17	20		35

- (b) Steps for working out the rule:

1. Difference is 3
2. Part of rule is  $3p$
3. Correction factor, so that the rule works is, add on 2

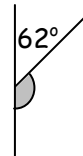
$$3 \times 3 + 2 = 11$$

Full rule is:  $S = 3p + 2$

Foundation Paper 2 2001

Created by  
Graduate Bsc (Hons) MathsSci (Open) GIMA

6. Given the flagpole picture.



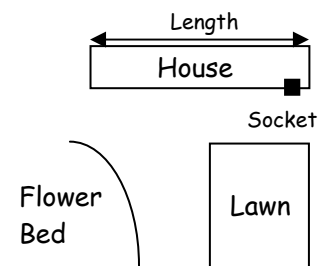
The size of the shaded angle is

$$180^\circ - 62^\circ = 118^\circ$$

7. Given Irene has £20 to spend and can only buy 3 items of which a maximum of 2 can be the same. Another possible 5 ways that Irene can get the free bag are: (there are more!)

Item 1	Item 2	Item 3	Total
Soap	Soap	Shampoo	£16
Soap	Soap	Shower Gel	£17
Soap	Soap	Deodorant	£19
Soap	Shampoo	Shampoo	£17
Soap	Shower Gel	Shower Gel	£19
Soap	Shampoo	Shower Gel	£18

8. Given plan of house and garden.



(a) From the plan the length of the house is 9.4 cm

(b) Given 1cm = 2 metres

$$\begin{array}{r} \text{Then the actual length of the house is} \\ 9.4 \\ \times 2 \\ \hline 18.8 \end{array} \quad 18.8 \text{ metres}$$

## Foundation Paper 2 2001

Created by

Graduate Bsc (Hons) MathsSci (Open) GIMA

8. (c) from the plan the furthest point from the socket would be the bottom left hand corner of the lawn.
- (d) Given the cable is 25m, it will not reach all parts of the lawn. Measuring the length to the corner of the lawn, it is 13.7cm which is actually 27.4m. The cable is only 25m.
9. Completing the frequency table for the temperatures we get:

Temperature °C	Tally	Frequency
12	1	1
13		0
14	1,1	2
15	1,1,1	3
16	1,1,1,1,1	5
17	1,1,1	3

The mode is the most recurring temperature with is 16 °C.

10. Given the rule

$$\text{Child's Dose} = (\text{Adult's dose} \times \text{Child's age}) \div (\text{Child's age} + 12)$$

Given the adult dose is 15ml. A child of age 8 years will have a dose of:

$$\begin{aligned} \text{Child's Dose} &= (15 \times 8) \div (8 + 12) \\ &= 120 \div 20 \\ &= 6\text{ml} \end{aligned}$$

## Foundation Paper 2 2001

Created by  
Graduate Bsc (Hons) MathsSci (Open) GIMA

11. Given that we have 2m length of red ribbon and 3m of yellow ribbon to decorate the 5 presents. We can cut the ribbons as follows:

Box	Colour of Ribbon	Length
A	Yellow	140 cm
B	Red	75 cm
C	Yellow	70 cm
D	Yellow	90 cm
E	Red	120 cm

12. Given that 12 minutes of parking costs 20p.

(a) Then for 60p we will get  $3 \times 12 = 36$  minutes of parking.

(b) To park for the maximum time of 2 hours it will cost:

2 hours is equal to 120 minutes

$\begin{array}{r} 10 \\ 12 \overline{)120} \end{array}$  There are 10 sets of 12 minutes in 2 hours.

The cost of 12 minutes is 20p

Hence total cost for 2 hours is  $10 \times 20 = \text{£}2$

## Foundation Paper 2 2001

Created by  
Graduate Bsc (Hons) MathsSci (Open) GIMA

13. Given the recipe for one sponge.

375 g of flour  
150 g of butter  
100g of sugar  
2 large eggs  
Vanilla essences

- (a) Given 3kg of flour and we use it all. We can make:

3kg is equal to 3000g

Using the calculator we have

$$375 \overline{)3000}^8 \quad 8 \text{ cakes can be made.}$$

- (b) Given a packet of butter weighs 250g. If we make 7 cakes we need:

For 7 cakes we need

$$\begin{array}{r} 150 \\ \times 7 \\ \hline 1050 \\ \hline \end{array} \quad 1050\text{g of butter}$$

So we need

$$250 \overline{)1050.0}^{4.2} \quad 5 \text{ packets of butter}$$