

Name Teacher 

www.mathsrevision.com

## Level C Homework 1 - Whole Numbers

1. Complete each calculation:-

a

	7	9
+		8

b

	3	6	0
+		7	0

2. Complete each calculation:-

a

	9	5
-		7

b


	3	3	0
-		5	0

3. Set these out in the same way and then do the calculations.

a  $75 + 6$


b  $540 - 70$



4. Write down the time on Clock 2 in two ways as shown for Clock 1.

am or pm time  
4.15 pm

Clock 1 :After school



am or pm time

Clock 2: Morning interval

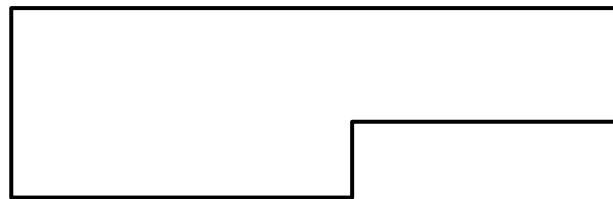
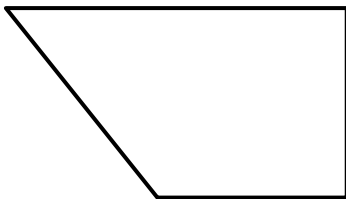
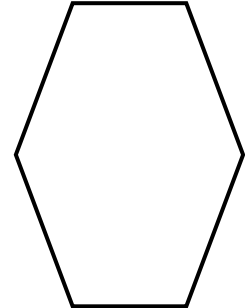
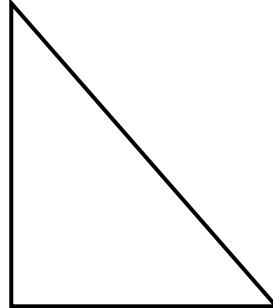
5. Jack's birthday is on the 25<sup>th</sup> of November, 1997 or 25/11/97.

Write today's date in two ways.

Name Teacher 

www.mathsrevision.com  
Level C Homework 2 - Angles

1. On each shape, mark all the right angles with a box.



2. Write each angle in the correct box.

120°

50°

180°

95°

71°

90°

1°

Acute

Right

Obtuse

Straight





3. Complete the sums :-

a

	£	0	.	4	5
+	£	0	.	8	6


b

	£	4	.	5	3
-	£	1	.	8	9

Name Teacher 

www.mathsrevision.com  
Level C Homework 3 – Money

1. How many 1p pieces will I get for:-






2. How many 10p pieces will I get for:-






3. Complete the calculations:-

a)

	£	0	.	8	8
+	£	0	.	7	5

b)

	£	4	.	2	7
-	£	3	.	0	9

4. Find the following amounts:-

a)  $\frac{1}{3}$  of £18

b)  $\frac{1}{5}$  of 35 kg

Name

Teacher

www.mathsrevision.com  
Level C Homework 4 - Money

1. Find:-


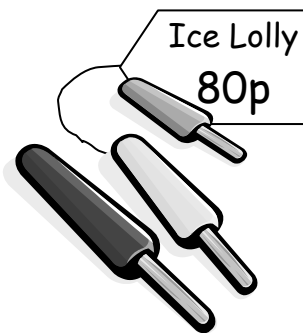
a)  $£2.89 + £3.46$

b)  $£5.76 - £3.38$

WORKING
ANSWER

WORKING
ANSWER

2.



a) Tom buys one bag of sweets, one can of Cola, one Ice Lolly and one Lolly. What is the total cost?

WORKING
ANSWER

b) Tom has one 51 coin and four 20p pieces. Does he have enough money? Explain.

WORKING
ANSWER

Name

Teacher

www.mathsrevision.com  
Level C Homework 5 - Statistics

1. Class 1G were asked what pets they have. Each pupil named one pet. Their answers are shown below.

Pet	Tally	Total
Cat		
Dog		
Mouse		
Fish		
Budgie		



- a) How many pupils have a cat? \_\_\_\_\_
- b) How many pupils have a fish? \_\_\_\_\_
- c) How many pupils have a mouse or a budgie? \_\_\_\_\_
- d) How many pupils are in class 1G. \_\_\_\_\_

2. Plot the points below onto the grid. Join each set in order as you move from one point to the next,

SET 1

E9 B6 E6

SET 2

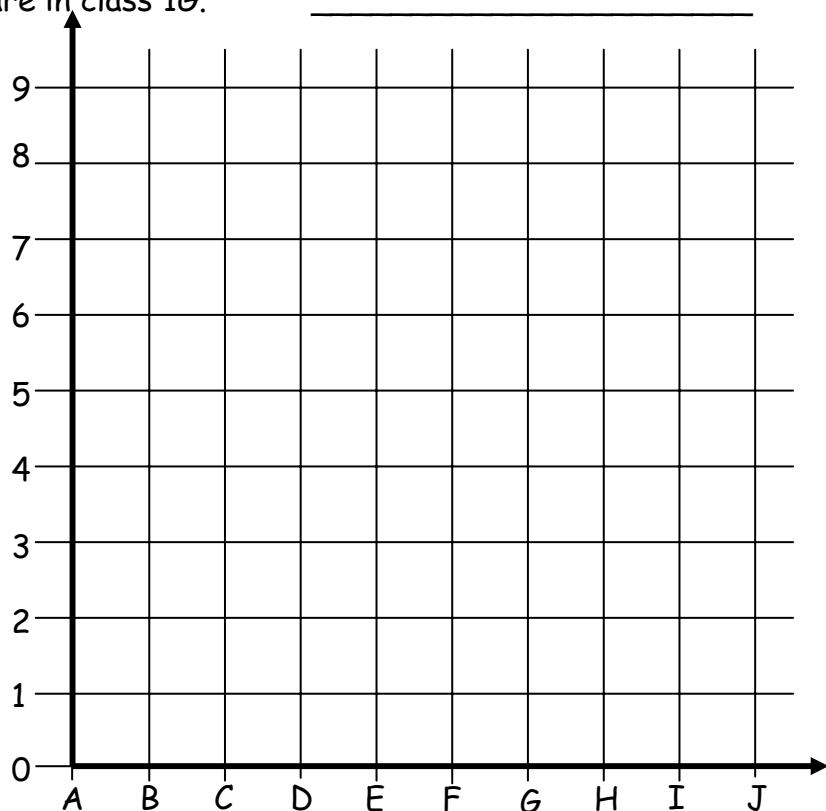
E9 G4 E4

SET 3

E9 E2

SET 4

I2 A2 C0 G0 I2

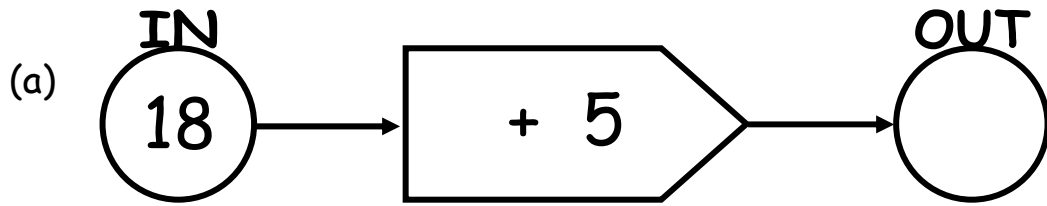


Name

Teacher

www.mathsrevision.com

## Level C Homework 6 - Algebra &amp; 2D Shapes

1. Write down the **OUT** number.

2.

Shape	Name?	How many Edges?
